




Solve each problem.

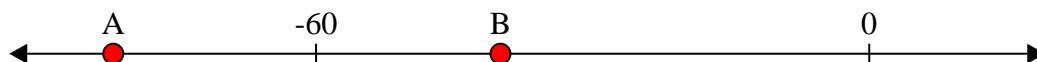
**Answers**

- 1) Which letter best shows -84?



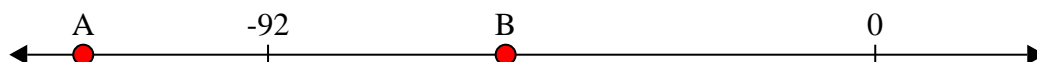
1. \_\_\_\_\_

- 2) Which letter best shows -40?




2. \_\_\_\_\_

- 3) Which letter best shows -120?




3. \_\_\_\_\_

- 4) Which letter best shows -62?




4. \_\_\_\_\_

- 5) Which letter best shows -34?




5. \_\_\_\_\_

- 6) Which letter best shows -36?



6. \_\_\_\_\_

- 7) Which letter best shows -119?



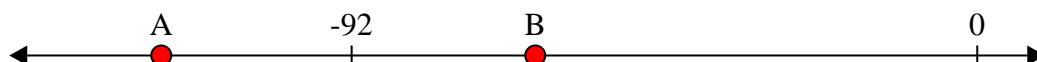
7. \_\_\_\_\_

- 8) Which letter best shows -106?




8. \_\_\_\_\_

- 9) Which letter best shows -120?



9. \_\_\_\_\_

- 10) Which letter best shows -85?




10. \_\_\_\_\_

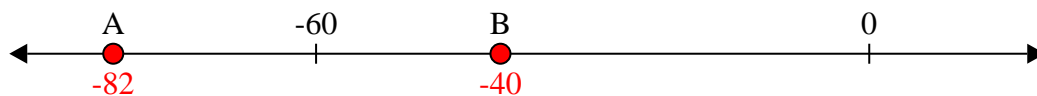


Solve each problem.

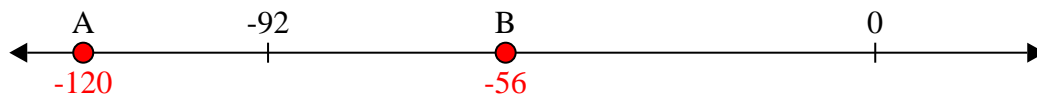
- 1) Which letter best shows -84?



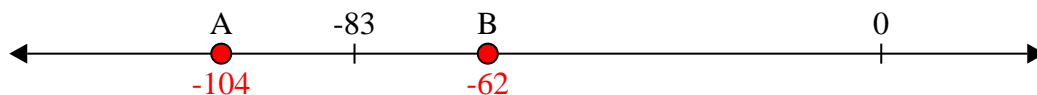
- 2) Which letter best shows -40?




- 3) Which letter best shows -120?




- 4) Which letter best shows -62?




- 5) Which letter best shows -34?




- 6) Which letter best shows -36?



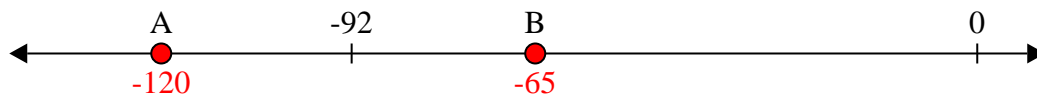
- 7) Which letter best shows -119?




- 8) Which letter best shows -106?



- 9) Which letter best shows -120?



- 10) Which letter best shows -85?

**Answers**

1. **A**  
2. **B**  
3. **A**  
4. **B**  
5. **B**  
6. **B**  
7. **A**  
8. **A**  
9. **A**  
10. **A**